

1. Work out $35.7 + 6.73$
(1 mark)2. Work out $15 - 7.6$
(1 mark)3. Work out 3.9×23
(2 marks)4. Work out $\pounds 7.72 \div 4$
(1 mark)

5. Round 24.62 to the nearest integer

.....
(1 mark)6. Work out $3 + (-14)$
(1 mark)7. What is $\frac{2}{5}$ of 35.....
(1 mark)

8. Find 40% of 140

.....
(1 mark)9. Convert $\frac{1}{3}$ to a decimal.....
(1 mark)10. Calculate $7^2 - \sqrt{64}$
(2 marks)

11. Write down the nth term

4, 8, 12, 16, 20

.....
(1 mark)

12. Simplify

 $\frac{4}{16}$
(1 mark)

Name : Class..... Score.....

13. Simplify $4p + 3w + 2p - 5w$

.....
(2 marks)

14. Simplify $3g \times 6h$

.....
(1 mark)

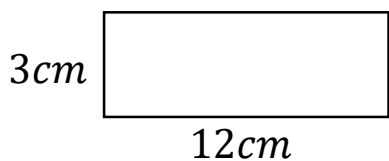
15. Expand $3(4a - 5)$

.....
(2 marks)

16. Write down all the factors of 24

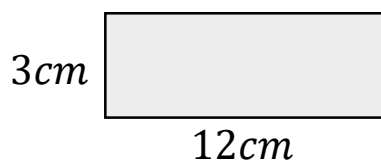
.....
(1 mark)

17. Calculate the perimeter



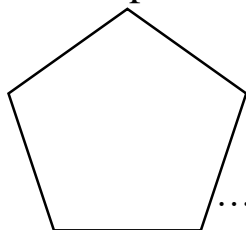
.....
(1 mark)

18. Calculate the area



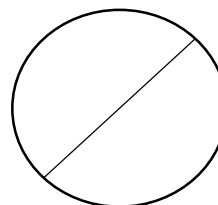
.....
(1 mark)

19. Name this shape



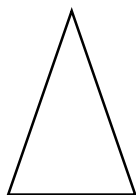
.....
(1 mark)

20. Name this part of a circle



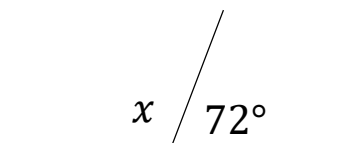
.....
(1 mark)

21. Draw all the lines of symmetry



.....
(1 mark)

22. Calculate x



$x =$

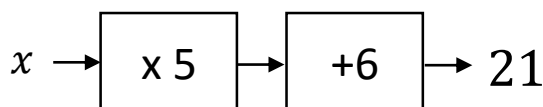
(1 mark)

23. Workout

$$4 \times 6 - 5 \times 2$$

.....
(2 marks)

24. Solve



$x =$

(1 mark)